

GWALIOR GLORY SCHOOL

WINTER HOLIDAY HOMEWORK ENGLISH (2024-25)

Class : III


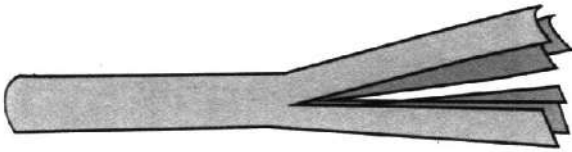
Name : _____ Sec. : _____ Roll No. : _____ Date : _____

(1) CREATIVE SKILLS: Let's create & 'Word Tree'!

You have learnt many new words from the morning assembly. Now, it's time to recall and write. Follow the instructions given and make your own word tree!

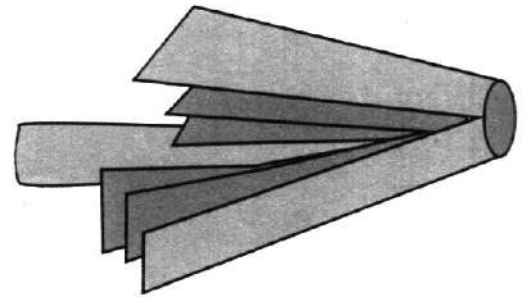
This is how you will do it.

- ◆ Take a long green sheet of paper or news paper. Roll it like this.




- ◆ Hold the roll of paper firmly in one hand and cut four slits from the top to halfway down the roll.

- ◆ Still holding the roll of paper firmly, bend back the four sections of the cut paper.



- ◆ Pull out the branches. Do this by pulling up the cut sections slowly and carefully from the centre of the roll.



- ◆ Write the different words you have learnt.

(3) STRETCHING A SENTENCE:

Add details in a sentence by answering the five 'Wh' questions! An example is given for you reference.

Who?

My little puppy.

What?

My little puppy keeps following me around.

When?

All day long, my little puppy keeps following me around.

Where?

All day long, my little puppy keeps following me around the house.

Why?

All day long, my little puppy keeps following me around the house as she wants to play.

(4) A- STRETCHING A SENTENCE:

WHO?

The big gray cloud



DOING
WHAT?

WHERE?


WHEN?

WHY?

(4) B- STRETCHING A SENTENCE:

WHO?

A cute cat



DOING
WHAT?

WHERE?

WHEN?

WHY?

(5)

PAST SIMPLE

24
regular
verbs



save, stop, copy, help, slip, try, use, display,
worry, beg, reduce, thank, nod, deny, surprise,
ban, search, serve, change, knit, study, marry,
respect, employ

Fill the table with regular verbs in past simple form

-d

1 save - saved

2 _____

3 _____

4 _____

5 _____

6 _____

-ed

1 help - helped

2 _____

3 _____

4 _____

5 _____

6 _____

x2+ed

1 stop - stopped

2 _____

3 _____

4 _____

5 _____

6 _____

-ied

1 copy - copied

2 _____

3 _____

4 _____

5 _____

6 _____

GWALIOR GLORY SCHOOL

Class : III

WINTER HOLIDAY HOMEWORK

HINDI (2024-25)

Name : _____ Sec. : _____ Roll No. : _____ Date : _____

- (1) प्रतिदिन एक पेज सुलेख का अभ्यास करो।
- (2) अपनी पाठ्यपुस्तक एवं पुस्तिका में किए गए कार्य का अभ्यास करो।
- (3) अपने प्रदेश के आस-पास के तीन प्रदेशों की भाषा, खान-पान, वेशभूषा, तीज-ज्योहारों के बारे में लिखकर ए4 साइज शीट पर चित्र चिपकाइए।
- (4) दिए गए प्रश्नों के उत्तर लिखिए।

(1) आप कौन-कौन से खेल खेलते हैं?

उ०

(2) आपका सबसे प्रिय खेल कौन-सा है?

उ०

(3) ऐसे खेलों के नाम बताइए जिनमें दो टीमों आमने-सामने होती हैं।

उ०

(4) आपने बॉल का प्रयोग करते हुए कौन-कौन से खेल खेले हैं, उनके नाम लिखो।

उ०

(5) वर्ग पहेली में खाने की वस्तुएँ ढूँढ़कर उन पर घेरा बनाओ।


व	ड़ा	इ	छा	छ	सा
दो	सा	ड	ढा	ब	भ
खा	ना	ली	छो	ले	र
रा	ज	मा	चा	व	ल
दा	ल	बा	टी	क्	ढ़ी
पा	य	स	चू	र	मा

- (6) अपने किसी एक प्रिय खिलाड़ी का नाम लिखकर एवं उसका चित्र चिपकाकर उसके बारे में दो वाक्य लिखो।

नाम— _____

वाक्य—

(1)



(2)

- (7) दिए गए मुहावरों के अर्थ लिखकर उनका वाक्यों में प्रयोग करो।

(1) आँखे खुलना

अर्थ — _____

वाक्य — _____

(2) मुँह में पानी आना

अर्थ — _____

वाक्य — _____

(3) हिम्मत न हारना

अर्थ — _____

वाक्य — _____

- (8) दिए गए चित्रों को पहचानिए एवं उनके नाम लिखकर उनके बारे में बताइए:—

(1)



नाम— _____

वाक्य — _____

(2)



नाम— _____

वाक्य — _____

(3)



नाम— _____

वाक्य — _____

(4)



नाम— _____

वाक्य — _____

(2)



नाम— _____

वाक्य — _____

(3)



नाम— _____

वाक्य — _____

(4)



नाम— _____

वाक्य — _____

(5)



नाम— _____

वाक्य — _____

(6)



नाम— _____

वाक्य — _____

(5)



नाम— _____

वाक्य — _____

(6)



नाम— _____

वाक्य — _____

GWALIOR GLORY SCHOOL

WINTER HOLIDAY HOMEWORK MATHEMATICS (2024-25)

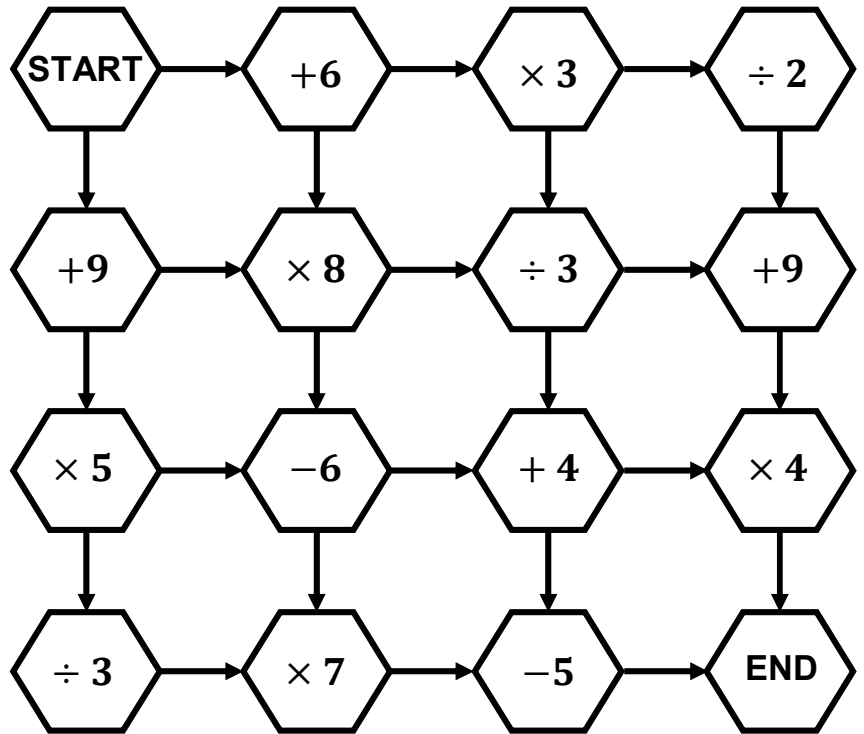
Class : III

Name : _____ Sec. : _____ Roll No. : _____ Date : _____

(1) Number Maze – Target 100

Start the maze with zero

- You have to finish the maze with a total of 100.
- You must follow one of the arrow each time.
- Use the colour to show the path.



(2) A teaspoon holds 5 millilitres of liquid. A teacup can hold 250 millilitres.

- a) How many teaspoons of honey will you need to use to fill the cup with honey? _____
- b) How many cups of honey will you need to fill 1 litre bottle?


Ans. _____

(3) The table below shows the length of few national highways in India. Complete the table using the clues given. Then check your answers whether the lengths are correct or not.

S.No.	National Highway	Length in km.
1.	NH44	3,745
2.	NH27	
3.	NH52	2,317
4.	NH30	

- a) The difference between the lengths of NH44 and NH30 is 1,705 km. _____
- b) The sum of the lengths of NH52 and NH27 is 5,824 km. _____

(4) Solve and colour the picture accordingly.



9x6 & 8x4
red

8x8 & 7x4
dark green

7x6 & 8x9
yellow

9x9 & 4x6
light blue

7x8 & 9x4
light green

4x4 & 5x8
orange

9x3 & 7x7
dark grey

9x0 & 4x0
pink

(5) Paste your photograph in the space provided. Create multiplication and division statements to find the information about you.

For example. If your shoe size is 6, the statement can be either $54 \div 9$ and 3×2


My shoe size

My age

(Eg- 6
 $54 \div 9$ and 3×2)

My birth date

My birth year



Number of students
in my class

My birth month

My favourite number

(5) Paste your photograph in the space provided. Create multiplication and division statements to find the information about you.

For example. If your shoe size is 6, the statement can be either $54 \div 9$ and 3×2


My shoe size

My age

(Eg- 6
 $54 \div 9$ and 3×2)

My birth date

My birth year



Number of students
in my class

My birth month

My favourite number

GWALIOR GLORY SCHOOL

WINTER HOLIDAY HOMEWORK SCIENCE (2024-25)

Class : III

Name: _____ Sec. : _____ Roll No. : _____ Date : _____

(1) NOTE:- (a) Do any one project out of the two.

(b) Submit it by 18th January 2025

(c) This project will be marked for Term-II

PROJECT-1:- Make a model of water, cycle using waste materials like cardboard, newspaper, cotton etc. (Reference video will be sent in class group)

OR

PROJECT-2:- Take 4 A-4 size sheet and show the eight planets. Mention the following points for each planet.

(a) Name of the planet (draw or paste picture of that planet)


(b) Indian name of the planet.

(c) Unique feature (any two)

(d) Number of moons

(2) Astronauts are people who are trained to travel in space. Till date 24 astronauts have visited the moon, but only 12 have walked on its surface. On an A-4 sheet mention any 6 astronauts who walked on the moon. Write their names, stick their pictures and mention the year in which they visited the moon.

(3) **Come OR Shine:** Solve the given crossword puzzle with the help of given clues.



ACROSS

DOWN

- | | |
|--------------------------------|---|
| 6. not cloudy | 1. full of sunshine |
| 7. colorful arch in the sky | 2. pellets of frozen rain |
| 8. light rain | 3. moving air |
| 9. Bright electrical discharge | 4. moisture in air |
| 14. ice pellets from the sky | 5. different climates throughout the year |
| 16. prediction of weather | 6. covered with clouds |
| 17. covered with gray | 10. powerful tropical cyclone |
| | 11. ice crystals on surfaces |
| | 12. long term atmospheric conditions |
| | 13. white fluffy precipitation |
| | 15. sound during a storm |
| | 18. opposite of hot |

GWALIOR GLORY SCHOOL

Class : III

WINTER HOLIDAY HOMEWORK SOCIAL SCIENCE (2024-25)

Name : _____ Sec. : _____ Roll No. : _____ Date : _____

(1) PROJECT

NOTE:-

- Do any one project out of the two.
- Submit it by 18th January'25
- This project will be marked for Term-II

(A) **Make a model of India Gate using waste material like cardboard, ice cream sticks or Thermocol etc.**

OR

(B) **Show the diverse culture of Indian dance form on A4 sheet in a collage form. Mention the name of the dance form along with the state it belongs to. [Any-6 dance forms]**

(2) **Know my country:**

'Read the clues and name these capital cities of Indian states'.

- 1) Capital of Rajasthan. It is also called the 'Pink City'.

J					
---	--	--	--	--	--
- 2) Capital of Telangana. It is also called the 'Pearl City'.

H									
---	--	--	--	--	--	--	--	--	--
- 3) Capital of West Bengal. It is also called the 'City of Joy'.

K					
---	--	--	--	--	--
- 4) Capital of Punjab and Haryana. It is famous for the Rock Garden.

C									
---	--	--	--	--	--	--	--	--	--
- 5) Capital of Karnataka. It is also called the 'Silicon Valley of India'.

B							
---	--	--	--	--	--	--	--
- 6) Capital of Maharashtra. It is best known for its beaches and Indian 'Bolly wood' Industry.

M				
---	--	--	--	--
- 7) Capital of Uttar Pradesh. It is famous for fine cuisine and Chikan embroidery.

L					
---	--	--	--	--	--
- 8) Capital of Tamil Nadu. The city is famous for ancient temples and delicious south-Indian food.

C					
---	--	--	--	--	--
- 9) Capital of Manipur. The Kongla Fort is located here.

I				
---	--	--	--	--
- 10) Capital of Himachal Pradesh. It is a famous hill station of North India.


S				
---	--	--	--	--

(3) Indian Shining stars!

Use the help box and name the following India stars.

- 1) Who was the first Indian scientist to win a Nobel Prize? _____
- 2) He was an Indian politician and lawyer who also served as the first President of India. Name him. _____
- 3) Who wrote the National Anthem of India? _____
- 4) Who was the first Indian to go to space? _____
- 5) Who was the first licensed pilot of India? _____
- 6) Whose birthday is celebrated as Teacher's Day in India? _____
- 7) Which brave queen was originally named Manikarnika? _____
- 8) Which Hindu monk founded the Ramakrishna Mission in 1897? _____

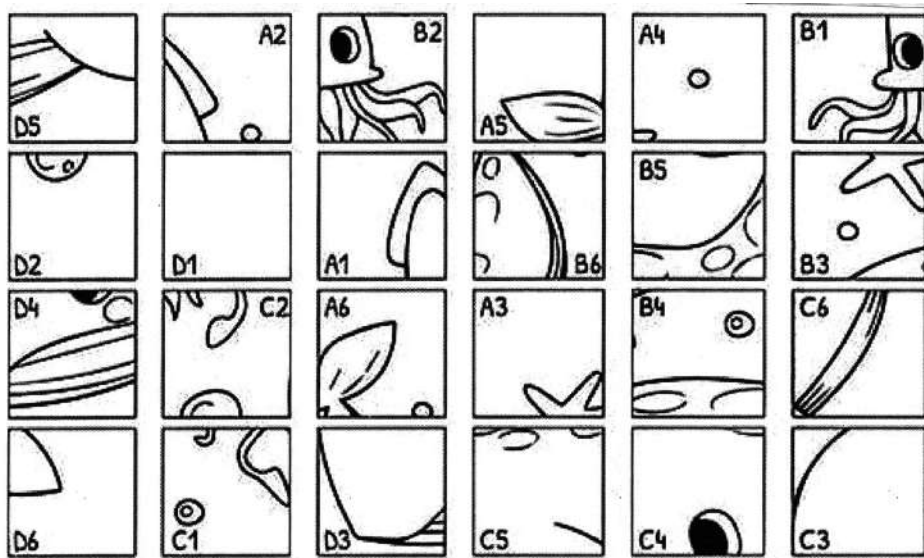
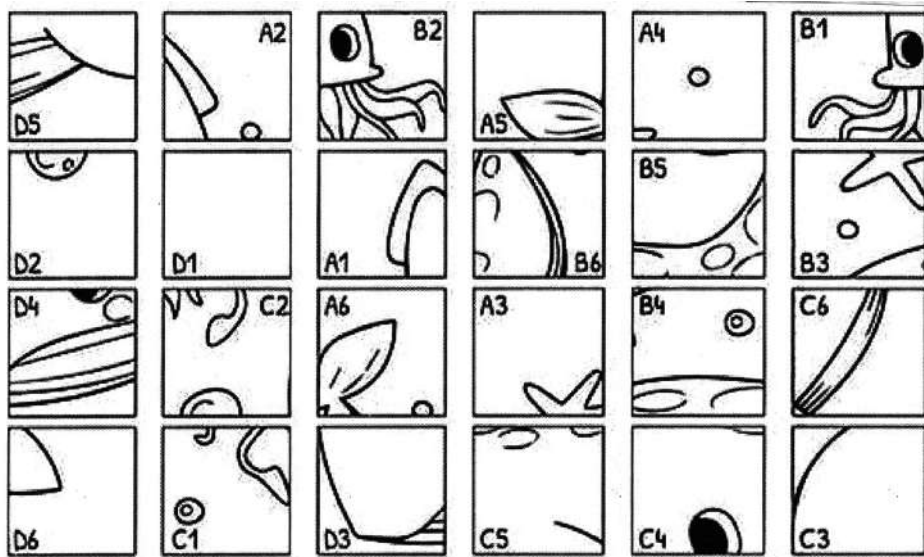
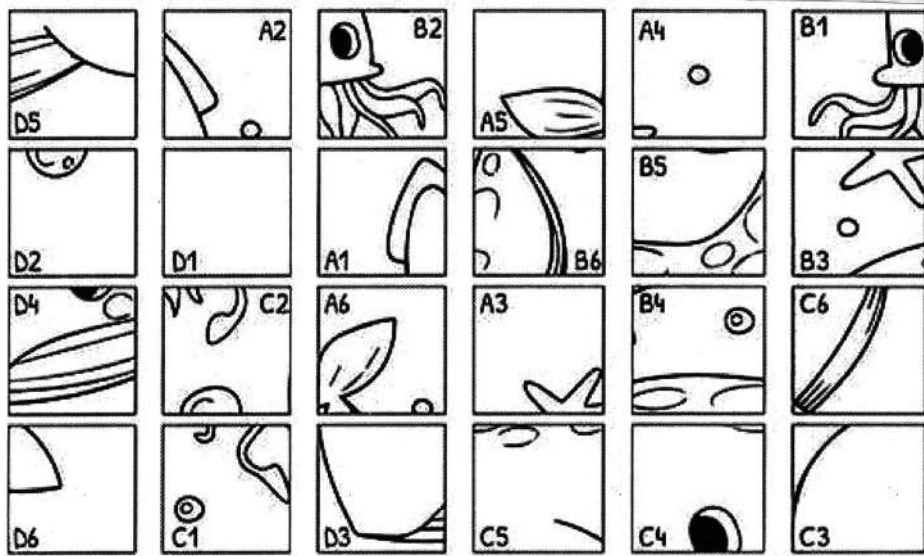
Dr. Rajendra Prasad	Rakesh Sharma
Rabindranath Tagore	J.R.D. Tata
Swami Vivekananda	Rani Lakshmi Bai
Dr. Sarvepalli Radhakrishnan	C.V. Raman



(4) Mystery Grid Drawing.

Cut the pictures given and stick them in the correct box to get the correct picture. Colour the picture.

	1	2	3	4	5	6
A						
B						
C						
D						



GWALIOR GLORY SCHOOL

WINTER HOLIDAY HOMEWORK

GK (2024-25)




Class : III

Name : _____ Sec. : _____ Roll No. : _____ Date : _____

1) Pick your book!

There are different type of books other than the textbooks. Read the clues and name them using the help box:-

- 1) This is a reference book that provides the definition of words, their origin and the way they are pronounced by using phonics. _____
- 2) This is a geographical reference book of maps. The different maps show population, climate and transportation. _____
- 3) This is a book that provides vast information on all branches of knowledge. _____
- 4) This book contains events and developments within a particular year. _____
- 5) This book provides factual information about specific subjects or organisations. _____
- 6) This book provides timelines of historical events. _____
- 7) This book tells about famous people, or ordinary people who have done exciting things. _____
- 8) This book is used to find different words that have the same or similar meaning. _____




encyclopaedia	yearbook	thesaurus	handbook
atlas	dictionary	biography	chronology

2) Draw the flags of any five countries along with countries name, capital and currency.

	Flag	Country	Capital	Currency
1)				
2)				
3)				
4)				
5)				

3) Smart Explorers.

“Read the clues and guess the names of the explorers using the help box”.



1 I was a Portuguese explorer who discovered the Sea Route to India. Who am I?

2 I completed four voyages across the Atlantic Ocean and discovered the 'New World' of the Americas. Who am I?

3 I was born in the Republic of Venice and I am famous for my travel to Asia. Who am I?

6 I was a British explorer, who mapped New Zealand and the Great Barrier Reef. Who am I?

4 I was the first man to sail around the Earth. I travelled from the Atlantic to the Pacific Ocean. The Strait of Magellan is named after me.

5 I was a Scottish explorer. I travelled in unexplored parts of Africa for more than 30 years. I discovered the famous Victoria Falls.

Christopher Columbus
Captain James Cook
Ferdinand Magellan

Vasco da Gama
David Livingstone
Marco Polo



4) Time for some math-o-mania!

Solve the puzzle given below using the correct number of sign.

Solve the puzzles given below.

1

2	+		=	10
+		+		+
		8		
=		=		=
6	+		=	22

2

7	+		=	14
+		+		+
		1		
=		=		=
12	+		=	20

3

10	-		=	8
-		+		+
		13		
=		=		=
5	+		=	20

4

			=	5
9	-			-
-		-		
		1		
=		=		=
6	-		=	3

5

2	x		=	8
x		x		x
		1		
=		=		=
4	x		=	16

GWALIOR GLORY SCHOOL

Class : III

WINTER HOLIDAY HOMEWORK COMPUTER (2024-25)

Name : _____ Sec. : _____ Roll No. : _____ Date : _____

(1) “Early to Bed..... Early to Rise..

makes you healthy.

Wealthy and Wise....”

Type the significance of above rhyme in your life on Microsoft word using below given style and size:

Font Style : Bell MT,

Font Size: 36

(2) **Using creative font style and size of your choice, type 100 – 200 words on your.**

➤ DREAM PLACE : You want to visit

OR

➤ DREAM HOBBY : You want to perfect In.

GWALIOR GLORY SCHOOL

Class : III

WINTER HOLIDAY HOMEWORK COMPUTER (2024-25)

Name : _____ Sec. : _____ Roll No. : _____ Date : _____

(1) “Early to Bed..... Early to Rise..

makes you healthy.

Wealthy and Wise....”

Type the significance of above rhyme in your life on Microsoft word using below given style and size:

Font Style : Bell MT,

Font Size: 36

(2) **Using creative font style and size of your choice, type 100 – 200 words on your.**

➤ DREAM PLACE : You want to visit

OR

➤ DREAM HOBBY : You want to perfect In.